

Tuesday Lesson 2 Time to the hour.

Time to the hour

1 Match the clocks to the times.



8 o'clock



6 o'clock



4 o'clock

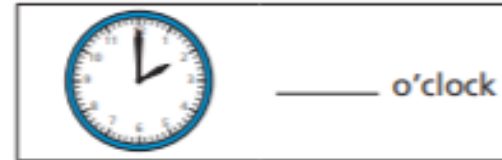


1 o'clock


2 Complete the pattern.




1 o'clock



_____ o'clock



3 o'clock



4 o'clock



_____ o'clock

What time comes next?



2 Complete the pattern.



What time comes next?



3 Which time matches the clock?



3 o'clock

12 o'clock



3 o'clock

12 o'clock

4 Which time is more likely?

a) Mo goes to school.



b) Mo goes to bed.



c) Mo has lunch.

